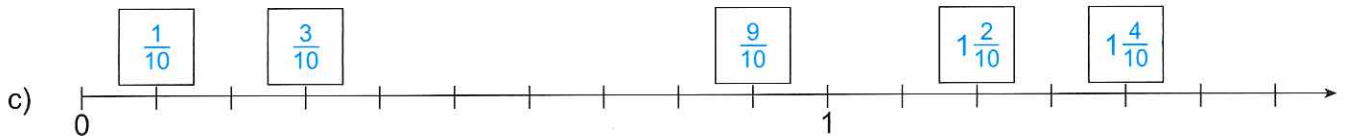
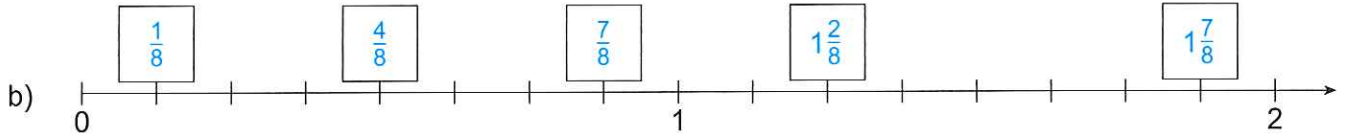
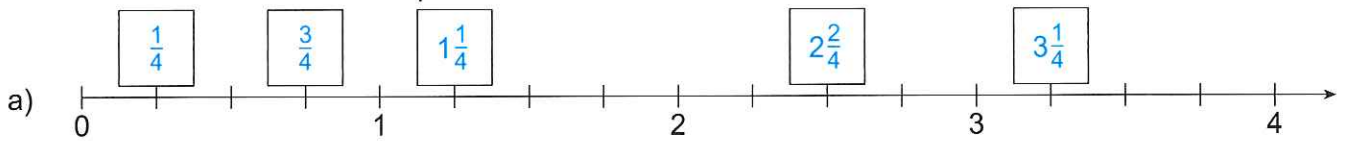
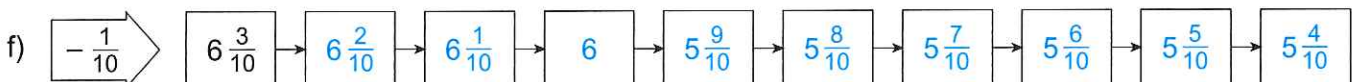
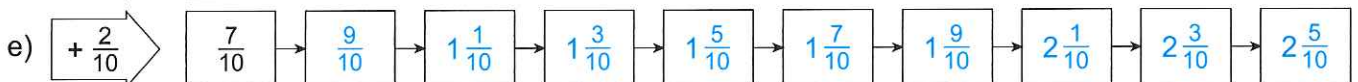
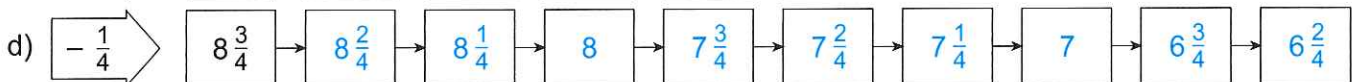
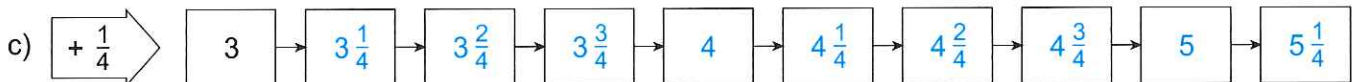
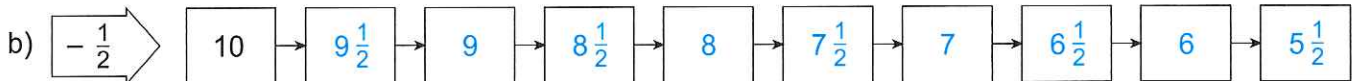
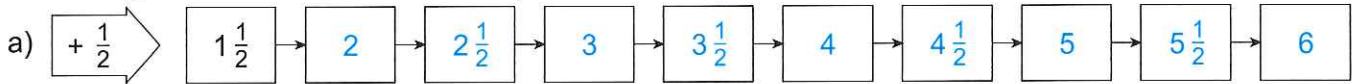


5) Zahlenstrahl – schreibe die entsprechenden Bruchzahlen in die Kästchen.



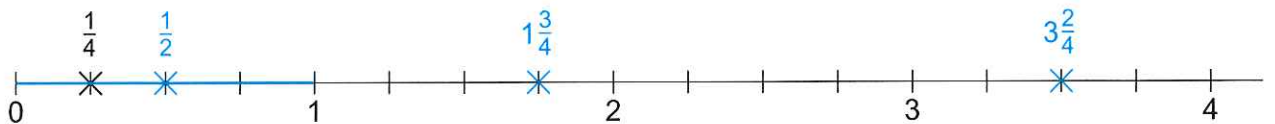
6) Zahlenfolgen: Addiere bzw. subtrahiere jeweils die Zahl, die vorne im Pfeil steht.



7) Ziehe auf jedem Zahlenstrahl die Strecke von 0 bis 1 bunt mit Lineal nach. Markiere die gegebenen Zahlen mit einem Kreuz. Ordne die Zahlen der Größe nach.

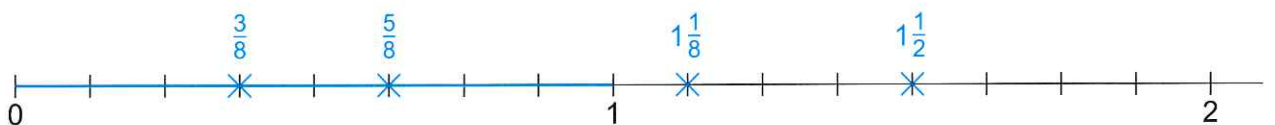
a) $\frac{1}{4}$, $3\frac{2}{4}$, $1\frac{3}{4}$, $\frac{1}{2}$

$$\frac{1}{4} < \frac{1}{2} < 1\frac{3}{4} < 3\frac{2}{4}$$



b) $\frac{3}{8}$, $1\frac{1}{8}$, $\frac{5}{8}$, $1\frac{1}{2}$

$$\frac{3}{8} < \frac{5}{8} < 1\frac{1}{8} < 1\frac{1}{2}$$



c) $\frac{2}{10}$, $\frac{9}{10}$, $1\frac{3}{10}$, $\frac{5}{10}$

$$\frac{2}{10} < \frac{5}{10} < \frac{9}{10} < 1\frac{3}{10}$$

